

1. (10)

R

ω

$V = \omega(R - r),$ $r -$

2. (10)

V_0

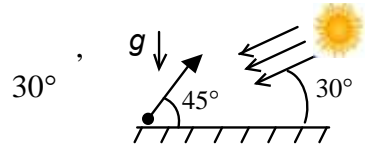
45°

(. .),

(5).

(5)?

g



3. (10)

m

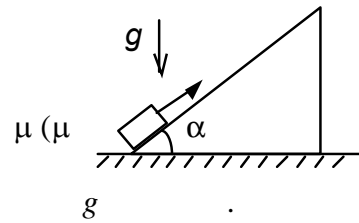
(. .).

$\alpha,$

$< \text{tg}\alpha.$

(5)

(5)?

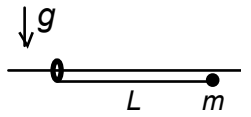


4. (10)

m

L

(. .).

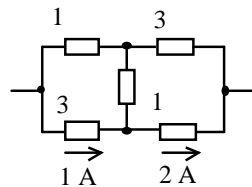


« - »

« - » (4

(6)?

g



5. (10)

(5).

(5)