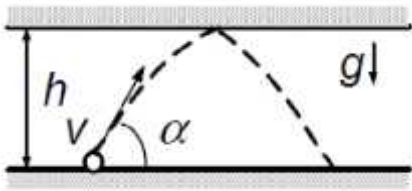


1

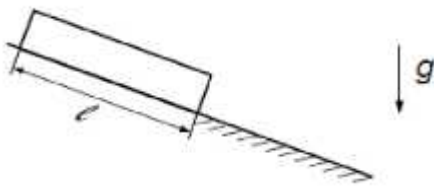


$v = 10$ /

$= 60^\circ$

$h = 3$

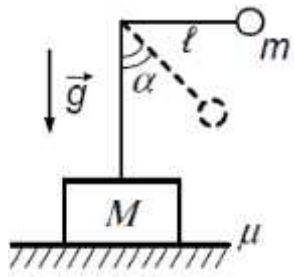
2



l .

v .

3



l .

M ,

m

90°

μ .

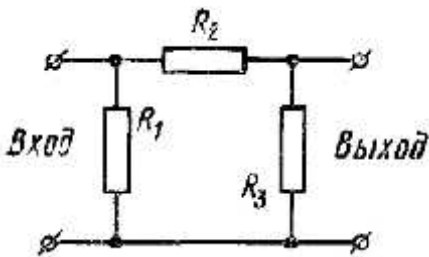
4



-13600 / 3 .

900 / 3 ,

5



R_2
 60 ,

$I_2 = 1$.

$U_3 = 40$.

$U_1 = 100$,

$U_3' =$
 $U_1' = 15$.

R_1, R_2 R_3 .

10

!!!